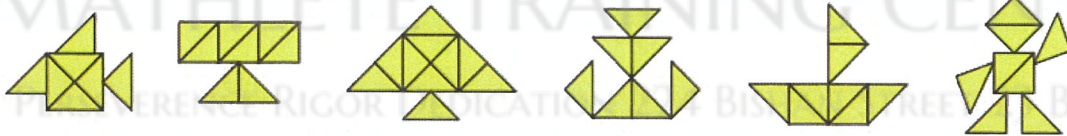


Mathlete Training Centre
WMI 2022 GRADE 1A



1. How many figures below are formed by 8  's?



- (A) 1 (B) 2 (C) 3 (D) 4

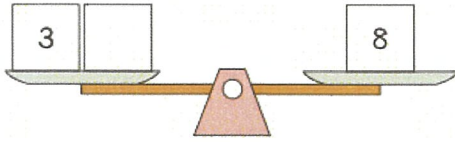
MATHLETE TRAINING CENTRE

PERSEVERENCE RIGOR DEDICATION 224 BISHAN STREET 23 BI-131


2.  

- (A) 7 (B) 14 (C) 17 (D) 15

3. Look at the picture and complete the number sentence.



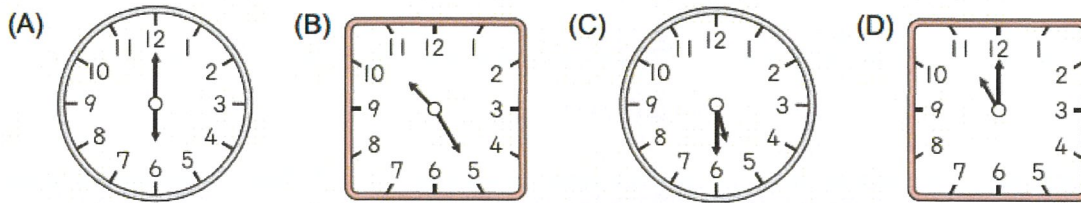
- (A) $3 + 3 = 8$ (B) $3 + 8 = 11$ (C) $5 + 3 = 8$ (D) $5 + 5 = 10$



- (A) (B) (C) (D)

4.

5. Which clock face shows the time is the closest to 12:15?



6. $\square + 4 + 4 = 16$

- (A) 6 (B) 4 (C) 5 (D) 8

7. Look at the picture below. Write the codes of the four ropes from the longest to the shortest.



- (A) CBAD (B) BACD (C) BDCA (D) BCDA





 = 6,  = ?



8. (A) 32 (B) 33 (C) 35 (D) 38

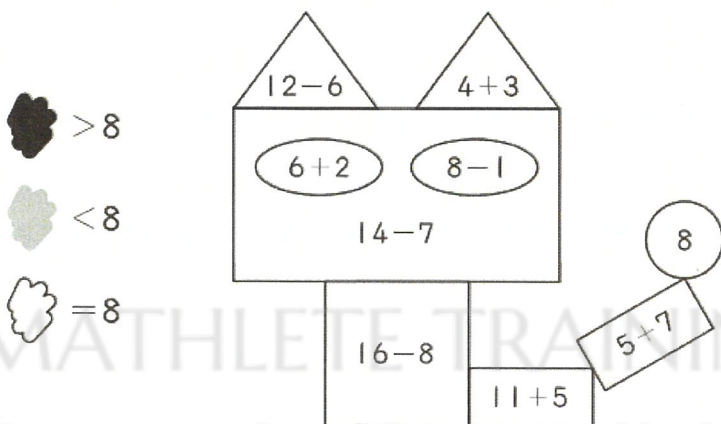
9. Today is March 21. Whose birthday shall we celebrate 20 days later?

 Ada	 Bella	 Carter	 Dan
April 20 4月20日	March 1 3月1日	May 10 5月10日	April 10 4月10日

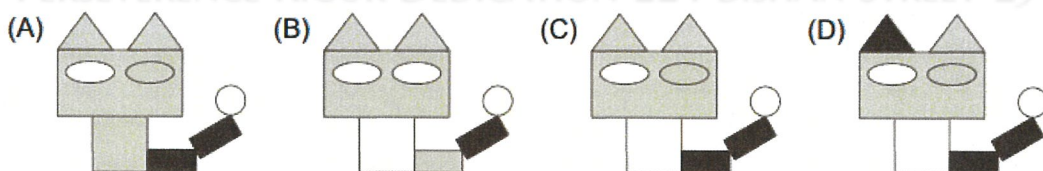
- (A)  Ada (B)  Bella (C)  Carter (D)  Dan

10. Count forward by 3s from 29. Among these numbers, which digits from 0-9 shows up the latest?

- (A) 6 (B) 0 (C) 8 (D) 5



11.



12. During a basketball game, Durant shot 14 balls and missed 9 of them. Ervin shot 12 balls and missed 6 of them. Who scored more, and how many more shots?

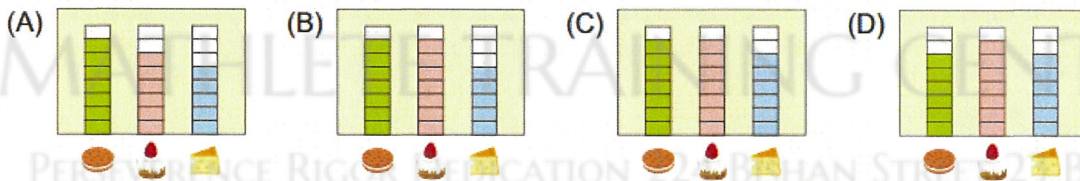

- (A) Ervin, 1 (B) Durant, 2 (C) Ervin, 3 (D) Durant, 1


13. 27 students stand in a row. Given that Andy is the last in the row, Bob is at the center of the row, and Cathy stands between Andy and Bob yet she is closer to Bob. What is Cathy's position from the front?
- (A) 21 (B) 20 (C) 13 (D) 9




MATHLETE TRAINING CENTRE
 PERSEVERENCE RIGOR DEDICATION 224 BISHAN STREET 23 BI-131

MATHLETE TRAINING CENTRE
 PERSEVERENCE RIGOR DEDICATION 224 BISHAN STREET 23 BI-131

14.





15. (A)  (B)  (C)  (D) 