

Mathlete Training Centre
2024 AMC 10B

1. In a long line of people arranged left to right, the 1013th person from the left is also the 1010th person from the right. How many people are in the line?

- (A) 2021 (B) 2022 (C) 2023 (D) 2024 (E) 2025

MATHLETE TRAINING CENTRE
PERSEVERENCE RIGOR DEDICATION 224 BISHAN STREET 23 BI-131

MATHLETE TRAINING CENTRE

PERSEVERENCE RIGOR DEDICATION 224 BISHAN STREET 23 BI-131

2. What is $10! - 7! \cdot 6!$

- (A) -120 (B) 0 (C) 120 (D) 600 (E) 720

MATHLETE TRAINING CENTRE

PERSEVERENCE RIGOR DEDICATION 224 BISHAN STREET 23 BI-131

3. For how many integer values of x is $|2x| \leq 7\pi$?
(A) 16 (B) 17 (C) 19 (D) 20 (E) 21

MATHLETE TRAINING CENTRE

PERSEVERENCE RIGOR DEDICATION 224 BISHAN STREET 23 BI-131

MATHLETE TRAINING CENTRE

4. Balls numbered $1, 2, 3, \dots$ are deposited in 5 bins, labeled $A, B, C, D,$ and E using the following procedure. Ball 1 is deposited in bin A , and balls 2 and 3 are deposited in bin B . The next 3 balls are deposited in bin C , the next 4 in bin D , and so on, cycling back to bin A after balls are deposited in bin E . (For example, balls numbered 22, 23, \dots , 28 are deposited in bin B at step 7 of this process.) In which bin is ball 2024 deposited?
(A) A (B) B (C) C (D) D (E) E

MATHLETE TRAINING CENTRE

PERSEVERENCE RIGOR DEDICATION 224 BISHAN STREET 23 BI-131

5. In the following expression, Melanie changed some of the plus signs to minus signs:

$$1 + 3 + 5 + 7 + \dots + 97 + 99$$

When the new expression was evaluated, it was negative. What is the least number of plus signs that Melanie could have changed to minus signs?

- (A) 14 (B) 15 (C) 16 (D) 17 (E) 18

MATHLETE TRAINING CENTRE

PERSEVERENCE RIGOR DEDICATION 224 BISHAN STREET 23 BI-131

MATHLETE TRAINING CENTRE

PERSEVERENCE RIGOR DEDICATION 224 BISHAN STREET 23 BI-131

6. A rectangle has integer side lengths and an area of 2024. What is the least possible perimeter of the rectangle?

- (A) 160 (B) 180 (C) 222 (D) 228 (E) 390

MATHLETE TRAINING CENTRE

PERSEVERENCE RIGOR DEDICATION 224 BISHAN STREET 23 BI-131

7. What is the remainder when $7^{2024} + 7^{2025} + 7^{2026}$ is divided by 19?
(A) 0 (B) 1 (C) 7 (D) 11 (E) 18

MATHLETE TRAINING CENTRE

PERSEVERENCE RIGOR DEDICATION 224 BISHAN STREET 23 BI-131

MATHLETE TRAINING CENTRE

8. Let N be the product of all the positive integer divisors of 42. What is the units digit of N ?
(A) 0 (B) 2 (C) 4 (D) 6 (E) 8

MATHLETE TRAINING CENTRE

PERSEVERENCE RIGOR DEDICATION 224 BISHAN STREET 23 BI-131

9. Real numbers a , b , and c have arithmetic mean 0. The arithmetic mean of a^2 , b^2 , and c^2 is 10. What is the arithmetic mean of ab , ac , and bc ?
- (A) -5 (B) $-\frac{10}{3}$ (C) $-\frac{10}{9}$ (D) 0 (E) $\frac{10}{9}$

MATHLETE TRAINING CENTRE

PERSEVERENCE RIGOR DEDICATION 224 BISHAN STREET 23 BI-131

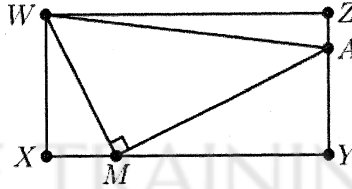
MATHLETE TRAINING CENTRE

10. Quadrilateral $ABCD$ is a parallelogram, and E is the midpoint of the side \overline{AD} . Let F be the intersection of lines EB and AC . What is the ratio of the area of quadrilateral $CDEF$ to the area of $\triangle CFB$?
- (A) $5:4$ (B) $4:3$ (C) $3:2$ (D) $5:3$ (E) $2:1$

MATHLETE TRAINING CENTRE

PERSEVERENCE RIGOR DEDICATION 224 BISHAN STREET 23 BI-131

11. In the figure below $WXYZ$ is a rectangle with $WX = 4$ and $WZ = 8$. Point M lies on \overline{XY} , point A lies on \overline{YZ} , and $\angle WMA$ is a right angle. The areas of $\triangle WXM$ and $\triangle WAZ$ are equal. What is the area of $\triangle WMA$?



- (A) 13 (B) 14 (C) 15 (D) 16 (E) 17

12. A group of 100 students from different countries meet at a mathematics competition. Each student speaks the same number of languages, and, for every pair of students A and B , student A speaks some language that student B does not speak, and student B speaks some language that student A does not speak. What is the least possible total number of languages spoken by all the students?

- (A) 9 (B) 10 (C) 12 (D) 51 (E) 100

13. Positive integers x and y satisfy the equation $\sqrt{x} + \sqrt{y} = \sqrt{1183}$. What is the minimum possible value of $x + y$?
- (A) 585 (B) 595 (C) 623 (D) 700 (E) 791

MATHLETE TRAINING CENTRE

PERSEVERENCE RIGOR DEDICATION 224 BISHAN STREET 23 BI-131

14. A dartboard is the region B in the coordinate plane consisting of points (x, y) such that $|x| + |y| \leq 8$. A target T is the region where $(x^2 + y^2 - 25)^2 \leq 49$. A dart is thrown and lands at a random point in B . The probability that the dart lands in T can be expressed as $\frac{m}{n} \cdot \pi$, where m and n are relatively prime positive integers. What is $m + n$?
- (A) 39 (B) 71 (C) 73 (D) 75 (E) 135

MATHLETE TRAINING CENTRE

PERSEVERENCE RIGOR DEDICATION 224 BISHAN STREET 23 BI-131

15. A list of 9 real numbers consists of 1, 2.2, 3.2, 5.2, 6.2, and 7, as well as x , y , and z with $x \leq y \leq z$. The range of the list is 7, and the mean and the median are both positive integers. How many ordered triples (x, y, z) are possible?
- (A) 1 (B) 2 (C) 3 (D) 4 (E) infinitely many

MATHLETE TRAINING CENTRE

PERSEVERENCE RIGOR DEDICATION 224 BISHAN STREET 23 BI-131

16. Jerry likes to play with numbers. One day, he wrote all the integers from 1 to 2024 on the whiteboard. Then he repeatedly chose four numbers on the whiteboard, erased them, and replaced them by either their sum or their product. (For example, Jerry's first step might have been to erase 1, 2, 3, and 5, and then write either 11, their sum, or 30, their product, on the whiteboard.) After repeatedly performing this operation, Jerry noticed that all the remaining numbers on the whiteboard were odd. What is the maximum possible number of integers on the whiteboard at that time?
- (A) 1010 (B) 1011 (C) 1012 (D) 1013 (E) 1014

MATHLETE TRAINING CENTRE

PERSEVERENCE RIGOR DEDICATION 224 BISHAN STREET 23 BI-131

17. Two teams are in a best-two-out-of-three playoff: the teams will play at most 3 games, example, the result of the race might be that Dazzler is first; Abby, Cyrus, and Elroy are tied for second; and Bruna is fifth. How many different results of the race are possible?
- (A) 180 (B) 361 (C) 420 (D) 431 (E) 720

MATHLETE TRAINING CENTRE

PERSEVERENCE RIGOR DEDICATION 224 BISHAN STREET 23 BI-131

MATHLETE TRAINING CENTRE

PERSEVERENCE RIGOR DEDICATION 224 BISHAN STREET 23 BI-131

18. How many different remainders can result when the 100th power of an integer is divided by 125?
- (A) 1 (B) 2 (C) 5 (D) 25 (E) 125

MATHLETE TRAINING CENTRE

PERSEVERENCE RIGOR DEDICATION 224 BISHAN STREET 23 BI-131


19. In the following table, each question mark is to be replaced by "Possible" or "Not Possible" to indicate whether a nonvertical line with the given slope can contain the given number of lattice points (points both of whose coordinates are integers). How many of the 12 entries will be "Possible"?

	zero	exactly one	exactly two	more than two
zero slope	?	?	?	?
nonzero rational slope	?	?	?	?
irrational slope	?	?	?	?

- (A) 4 (B) 5 (C) 6 (D) 7 (E) 9

20. Three different pairs of shoes are placed in a row so that no left shoe is next to a right shoe from a different pair. In how many ways can these six shoes be lined up?
- (A) 60 (B) 72 (C) 90 (D) 108 (E) 120

21. Two straight pipes (circular cylinders), with radii 1 and $\frac{1}{4}$, lie parallel and in contact on a flat floor. The figure below shows a head-on view. What is the sum of the possible radii of a third parallel pipe lying on the same floor and in contact with both?



- (A) $\frac{1}{9}$ (B) 1 (C) $\frac{10}{9}$ (D) $\frac{11}{9}$ (E) $\frac{19}{9}$

22. A group of 16 people will be partitioned into 4 indistinguishable 4-person committees. Each committee will have one chairperson and one secretary. The number of different ways to make these assignments can be written as $3^r M$, where r and M are positive integers and M is not divisible by 3. What is r ?

- (A) 5 (B) 6 (C) 7 (D) 8 (E) 9

23. The Fibonacci numbers are defined by $F_1 = 1, F_2 = 1$, and $F_n = F_{n-1} + F_{n-2}$ for $n \geq 3$. What is

$$\frac{F_2}{F_1} + \frac{F_4}{F_2} + \frac{F_6}{F_3} + \dots + \frac{F_{20}}{F_{10}}?$$

- (A) 318 (B) 319 (C) 320 (D) 321 (E) 322

MATHLETE TRAINING CENTRE

PERSEVERENCE RIGOR DEDICATION 224 BISHAN STREET 23 BI-131

MATHLETE TRAINING CENTRE

24. Let

$$P(m) = \frac{m}{2} + \frac{m^2}{4} + \frac{m^4}{8} + \frac{m^8}{8}$$


How many of the values $P(2022)$, $P(2023)$, $P(2024)$, and $P(2025)$ are integers?

- (A) 0 (B) 1 (C) 2 (D) 3 (E) 4

MATHLETE TRAINING CENTRE

PERSEVERENCE RIGOR DEDICATION 224 BISHAN STREET 23 BI-131

25. Each of 27 bricks (right rectangular prisms) has dimensions $a \times b \times c$, where a , b , and c are pairwise relatively prime positive integers. These bricks are arranged to form a $3 \times 3 \times 3$ block, as shown on the left below. A 28th brick with the same dimensions is introduced, and these bricks are reconfigured into a $2 \times 2 \times 7$ block, shown on the right. The new block is 1 unit taller, 1 unit wider, and 1 unit deeper than the old one. What is $a + b + c$?



- (A) 88 (B) 89 (C) 90 (D) 91 (E) 92

