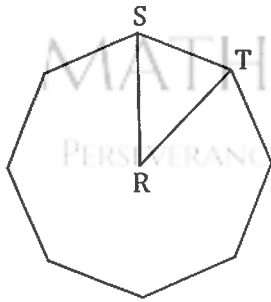


Mathlete Training Centre  
SMOPS 2014

1. (SMOPS 14Q1) The figure shows a regular octagon, Find the value of  $\angle SRT$  in degrees, where  $R$  is the centre of the octagon.



MATHLETE TRAINING CENTRE

PERSEVERANCE RIGOR DEDICATION 224 BISHAN STREET 23 BI-131

2. (SMOPS 14Q2) Which of the following statements is correct?

- (1)  $\frac{15}{19} < \frac{1}{3} < \frac{7}{19}$   
 (2)  $\frac{1}{3} < \frac{15}{19} < \frac{7}{19}$   
 (3)  $\frac{1}{3} < \frac{7}{19} < \frac{15}{19}$   
 (4)  $\frac{15}{19} < \frac{1}{3} < \frac{7}{19}$   
 (5)  $\frac{7}{19} < \frac{15}{19} < \frac{1}{3}$

MATHLETE TRAINING CENTRE

PERSEVERANCE RIGOR DEDICATION 224 BISHAN STREET 23 BI-131

3. (SMOPS 14Q3) Find the smallest positive integer with sum of digits equal to 29.

MATHLETE TRAINING CENTRE

PERSEVERANCE RIGOR DEDICATION 224 BISHAN STREET 23 BI-131

4. (SMOPS 14Q4) Abel and Jim run a race together on a 300 metres track. They start simultaneously at the same point. Abel runs at a constant speed of 5 m/s, while Jim runs at a constant speed of 4.2 m/s. How many full laps has Abel run before he is able to overtake Jim for the first time?

MATHLETE TRAINING CENTRE

PERSEVERANCE RIGOR DEDICATION 224 BISHAN STREET 23 BI-131

5. (SMOPS 14Q5) Only one of the following four numbers is a perfect square. Which one is it?
- (1) 76186
  - (2) 750325
  - (3) 924138
  - (4) 2660161

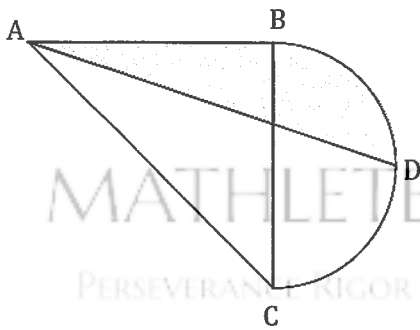
MATHLETE TRAINING CENTRE

PERSEVERANCE RIGOR DEDICATION 224 BISHAN STREET 23 BI-131

MATHLETE TRAINING CENTRE

PERSEVERANCE RIGOR DEDICATION 224 BISHAN STREET 23 BI-131

6. (SMOPS 14Q6) As shown in the diagram,  $ABC$  is an isosceles right-angled triangle with  $AB = 28$  cm.  $BC$  is the diameter of the semicircle and point  $D$  is the midpoint of arc  $BC$ . Find the area of the shaded region in  $\text{cm}^2$ . (Take  $\pi$  to be  $\frac{22}{7}$ .)



MATHLETE TRAINING CENTRE

PERSEVERANCE RIGOR DEDICATION 224 BISHAN STREET 23 BI-131

7. (SMOPS 14Q7) Three chess pieces, each of the colours red, black and white, are to be placed on a  $7 \times 7$  chessboard. If any two of the three pieces cannot be placed in the same row or the same column, how many ways are there to place the three chess pieces?

MATHLETE TRAINING CENTRE

PERSEVERANCE RIGOR DEDICATION 224 BISHAN STREET 23 BI-131

MATHLETE TRAINING CENTRE

8. (SMOPS 14Q8) There are 6 bags containing 18, 19, 21, 23, 25 and 34 balls respectively. One bag contains only red balls while the other five bags contains only blue balls. Jason takes three bags and Jamie takes two bags. The remaining bag contains red balls. It is known that now Jason has twice as many blue balls as Jamie does. Find the number of red balls in the remaining bag.

MATHLETE TRAINING CENTRE

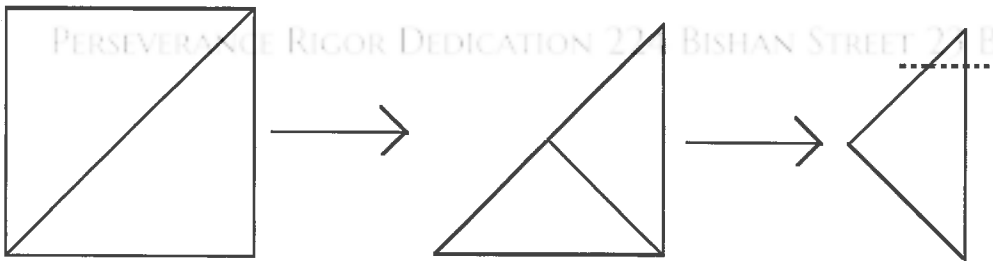
PERSEVERANCE RIGOR DEDICATION 224 BISHAN STREET 23 BI-131

9. (SMOPS 14Q9) A water tank can be filled by using tap A for 8 hours followed by tap B for 15 hours. The same tank can also be filled by using tap A for 5 hours followed by tap B for 24 hours. How long will it take (in hours) to fill the tank by using tap A only?

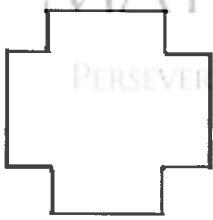
MATHLETE TRAINING CENTRE

PERSEVERANCE RIGOR DEDICATION 224 BISHAN STREET 23 BI-131

10. (SMOPS 14Q10) A square piece of paper is folded along the diagonals twice, as shown in the diagrams below. Then a cut is made along the dotted line.



When the paper is unfolded, which one of the following diagrams shows how the paper reappears?



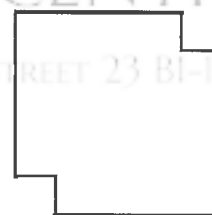
(1)



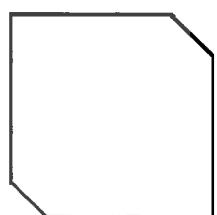
(2)



(3)



(4)



(5)

11. (SMOPS 14Q11) Find the value of  $20142014 \times 20132014 - 20132013 \times 20142014$ .

## MATHLETE TRAINING CENTRE

PERSEVERANCE RIGOR DEDICATION 224 BISHAN STREET 23 BI-131

12. (SMOPS 14Q12) Alan, ben , Chris and Daniel took part in a science quiz. the quiz consisted of 5 True or False questions. The table below shows the answers given by each of them and their scores. Each correct answer was given 1 point. How many points did Daniel score?

	Question 1	Question 2	Question 3	Question 4	Question 5	Score
Alan	T	F	F	F	F	2
Ben	F	T	F	F	T	3
Chris	F	T	F	T	T	4
Daniel	F	T	T	F	T	

PERSEVERANCE RIGOR DEDICATION 224 BISHAN STREET 23 BI-131

13. (SMOPS 14Q13) A computer program generated all five-letter code words that can be formed by using letters A, B, C, D, E, F, G, X, Y, Z (repetition is allowed). When all these words are sorted according to the alphabetical order, the following list is obtained: AAAAA, AAAAB, ..., AAAAZ, AAABA, AAABB, ..., ZZZZY, ZZZZZ. Find the number of code words between CZYGB and XEFDA, not including these two code words.

MATHLETE TRAINING CENTRE

PERSEVERANCE RIGOR DEDICATION 224 BISHAN STREET 23 BI-131

MATHLETE TRAINING CENTRE

PERSEVERANCE RIGOR DEDICATION 224 BISHAN STREET 23 BI-131

14. (SMOPS 14Q14) Find the largest 3-digit integer  $N$  such that when  $N$  is divided by 3, 7, and 11, the remainders are 1, 3 and 8 respectively.

MATHLETE TRAINING CENTRE

PERSEVERANCE RIGOR DEDICATION 224 BISHAN STREET 23 BI-131

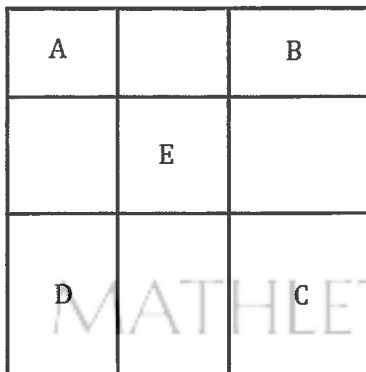
15. (SMOPS 14Q15) Find the value of

$$10 \times \left( \frac{1}{1 \times 2} + \frac{5}{2 \times 3} + \frac{11}{3 \times 4} + \cdots + \frac{89}{9 \times 10} \right)$$

MATHLETE TRAINING CENTRE

PERSEVERANCE RIGOR DEDICATION 224 BISHAN STREET 23 BI-131

16. (SMOPS 14Q16) As shown in the diagram, a square is divided into 9 regions. Region  $E$  is a square and the other regions are rectangles. If the area of rectangles  $A$ ,  $B$  and  $C$  are  $18 \text{ cm}^2$ ,  $63 \text{ cm}^2$  and  $189 \text{ cm}^2$  respectively, find the perimeter of rectangle  $D$ .



PERSEVERANCE RIGOR DEDICATION 224 BISHAN STREET 23 BI-131



17. (SMOPS 14Q17) The sum of 47 distinct positive integers is 2014. If there are  $n$  even numbers among the 47 integers, what is the least possible value of  $n$ ?

MATHLETE TRAINING CENTRE

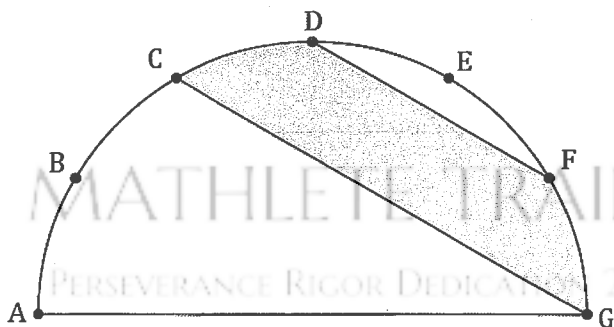
PERSEVERANCE RIGOR DEDICATION 224 BISHAN STREET 23 BI-131

18. (SMOPS 14Q18) A 9-digit integer  $\overline{abcdefgghi}$  is formed using the digits 1, 2, 3, 4, 5, 6, 7, 8, 9 without repetition. If  $A = \overline{abc} + \overline{bcd} + \overline{cde} + \overline{def} + \overline{efg} + \overline{fgh} + \overline{ghi}$ , find the largest possible value of  $A$ .

MATHLETE TRAINING CENTRE

PERSEVERANCE RIGOR DEDICATION 224 BISHAN STREET 23 BI-131

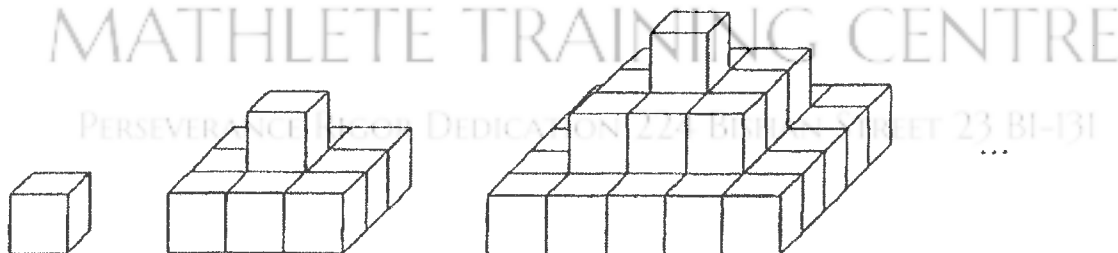
19. (SMOPS 14Q19) A semi-circle with diameter  $AG$  is shown in the diagram. The entire arc of the semi-circle is divided into 6 equal parts by points  $A, B, C, D, E$  and  $F$ .  $DF$  and  $CG$  are straight lines. Given that the area of the semi-circle is  $60 \text{ cm}^2$ , find the area of the shaded region in  $\text{cm}^2$ .



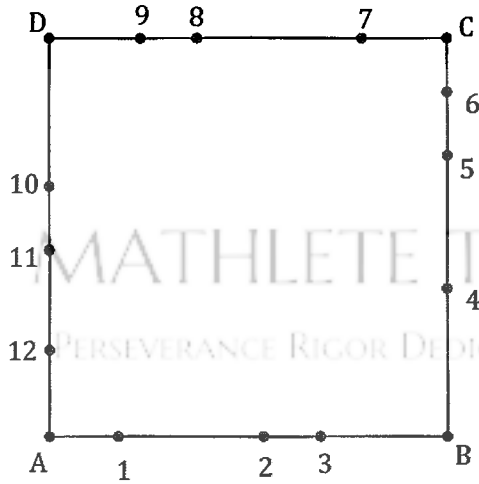
MATHLETE TRAINING CENTRE

PERSEVERANCE RIGOR DEDICATION 224 BISHAN STREET 23 BI-131

20. (SMOPS 14Q20) As shown in the diagram below, cubes with side length of 1 cm are placed together to form a sequence of solids. Find the surface area of the 20<sup>th</sup> solid in  $\text{cm}^2$ .



21. (SMOPS 14Q21) In the diagram, each side of the square  $ABCD$  is divided into 4 segments by the points numbered from 1 to 12. How many different triangles can be formed whose vertices can be any three points among points 1 to 12?



MATHLETE TRAINING CENTRE

PERSEVERANCE RIGOR DEDICATION 224 BISHAN STREET 23 BI-131

22. (SMOPS 14Q22) In a certain calendar year, there are more Mondays than Fridays, and more Sundays than Wednesdays. Which day of the week is 1<sup>st</sup> March in that year?

PERSEVERANCE RIGOR DEDICATION 224 BISHAN STREET 23 BI-131

23. (SMOPS 14Q23) There are 60 grams of 5% saline solution (Solution A), 60 grams of 8% saline solution (Solution B) and 47 grams of 9% saline solution (Solution C). These three types of solution are mixed together to produce 100 grams of 7% saline solution. Find the sum of the maximum and minimum grams of Solution A that can be used.

MATHLETE TRAINING CENTRE

PERSEVERANCE RIGOR DEDICATION 224 BISHAN STREET 23 BI-131

MATHLETE TRAINING CENTRE

24. (SMOPS 14Q24) If a whole number is divided by 5, the remainder is  $a$ . When the same number is divided by 6, the quotient is  $b$ . If the sum of  $a$  and  $b$  is 11, find the sum of all numbers that satisfy this requirement.

MATHLETE TRAINING CENTRE

PERSEVERANCE RIGOR DEDICATION 224 BISHAN STREET 23 BI-131

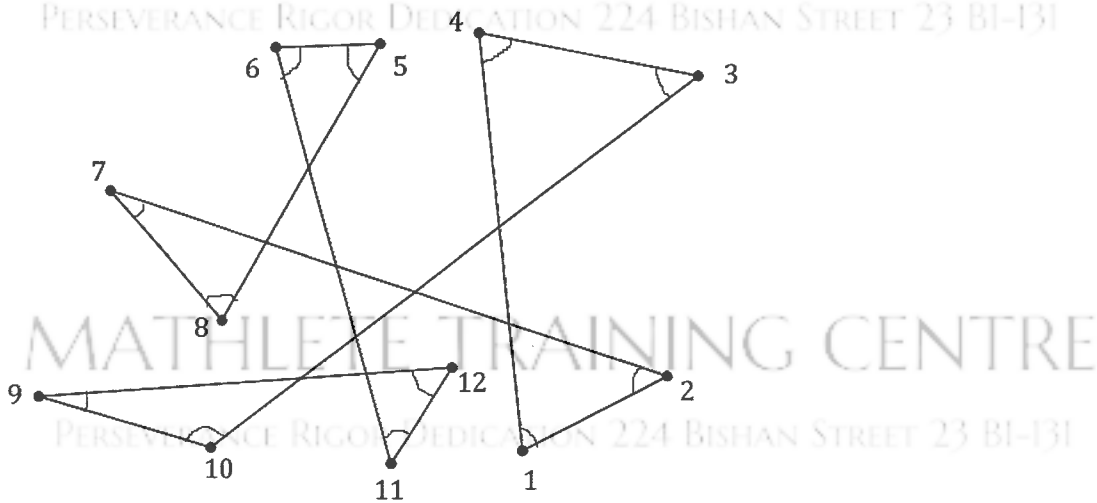
25. (SMOPS 14Q25) Dates can be written as an 8-digit number in the format of  $yyyymmdd$ . For example, 20140125 stands for January 25<sup>th</sup> 2014. How many days are there in year 2014 such that its 8-digit representation contains equal numbers of digit 0, 1, and 2?

# MATHLETE TRAINING CENTRE

PERSEVERANCE RIGOR DEDICATION 224 BISHAN STREET 23 BI-131

# MATHLETE TRAINING CENTRE

26. (SMOPS 14Q26) Find the sum of all angles labelled from 1 to 12 in the diagram below.

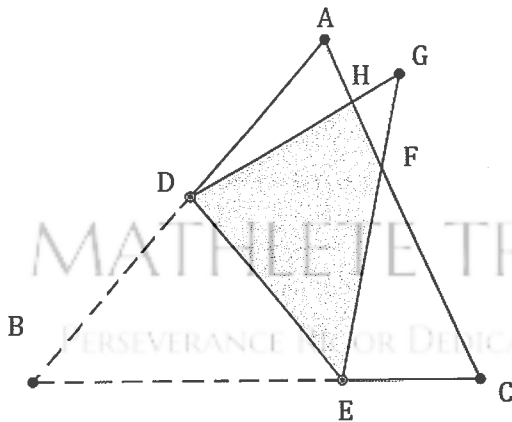


27. (SMOPS 14Q27) Appending a positive integer  $N$  at the end of any positive integer to form a new number (for example, appending 21 at the end of 35 gives 3521), if this new number is always divisible by  $N$ , then  $N$  is called a "magic number". Find the total number of "magic numbers" less than 600.

# MATHLETE TRAINING CENTRE

PERSEVERANCE RIGOR DEDICATION 224 BISHAN STREET 23 BI-131

28. (SMOPS 14Q28) As shown in the diagram, part of a triangle  $ABC$  is folded along the line  $DE$ , resulting in a heptagon  $ADECFGH$ . If the ratio of the area of this heptagon to the area of triangle  $ABC$  is  $5 : 7$ , and the area of the shaded region  $DEFH$  is  $8 \text{ cm}^2$ , find the area of the triangle  $ABC$ .



29. (SMOPS 14Q29) From 2014 to 6999, how many integers have its sum of digits divisible by 5?

MATHLETE TRAINING CENTRE

PERSEVERANCE RIGOR DEDICATION 224 BISHAN STREET 23 BI-131

30. (SMOPS 14Q30) A bus and a truck started travelling towards each other at the same instant, from cities A and B respectively. When they met along the road after 6 hours, the bus was 240 km away from city B. upon reaching city B, the bus stopped for one hour of maintenance, before it headed back to city A. The truck took 15 hours to travel from city B to city A, and also stopped for one hour of maintenance before going back to city B. The bus and the truck met again on their ways back to their cities of origin. How many hours has passed between their first and second encounters?

MATHLETE TRAINING CENTRE

PERSEVERANCE RIGOR DEDICATION 224 BISHAN STREET 23 BI-131

# MATHLETE TRAINING CENTRE

PERSEVERANCE RIGOR DEDICATION 224 BISHAN STREET 23 BI-131

# MATHLETE TRAINING CENTRE

PERSEVERANCE RIGOR DEDICATION 224 BISHAN STREET 23 BI-131

# MATHLETE TRAINING CENTRE

PERSEVERANCE RIGOR DEDICATION 224 BISHAN STREET 23 BI-131